



Worksheet 1

Name: _____

Subject: _____

Science

Class: _____

Third grade

Date: _____

- Look at the pictures of the landforms. Write the number of the correct description in the box next to each landform.



4

1. Caves



1

2. River bed



3

3. Mountains



2

4. Canyons



5

5. Sand dunes

- Fill in the blanks with the correct answer.


riverbed - canyon - caves - sand dune

- A Sand dunes is a hill of sand formed by the wind.
- A very deep valley with steep sides is called a Canyon.
- Water flows along a river bed in a river.
- Underground spaces in rocks are called Caves.


- Read each statement carefully. If it is true, write T; if it is false, write F.

1. Mountains are formed under the sea. (F)
2. Sand dunes can change shape with the wind. (T)
3. Canyons are flat and wide. (F)


- Look at the pictures below, Write the correct name for each landform.




Canyon



Sand dunes



riverbed



Caves



mountains

Science Department
Teacher: Sara Samawi