



## Worksheet

Name :

Subject:

Grade 1 revision



Class:

Grade 1 A/ B

Date:

----/1/2026

**Q1:** Write the numbers that comes before and after.

<input type="text"/>	25	<input type="text"/>	<input type="text"/>	83	<input type="text"/>	
<input type="text"/>	76	<input type="text"/>		<input type="text"/>	45	<input type="text"/>
<input type="text"/>	15	<input type="text"/>		<input type="text"/>	30	<input type="text"/>
<input type="text"/>	44	<input type="text"/>		<input type="text"/>	24	<input type="text"/>
<input type="text"/>	29	<input type="text"/>		<input type="text"/>	81	<input type="text"/>
<input type="text"/>	65	<input type="text"/>		<input type="text"/>	49	<input type="text"/>
<input type="text"/>	38	<input type="text"/>		<input type="text"/>	97	<input type="text"/>
<input type="text"/>	71	<input type="text"/>		<input type="text"/>	60	<input type="text"/>
<input type="text"/>	99	<input type="text"/>		<input type="text"/>	88	<input type="text"/>



## Worksheet

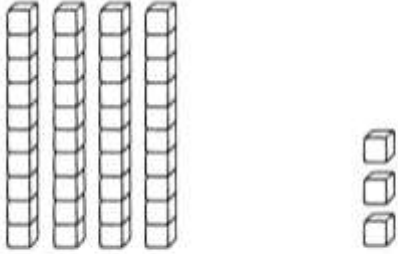
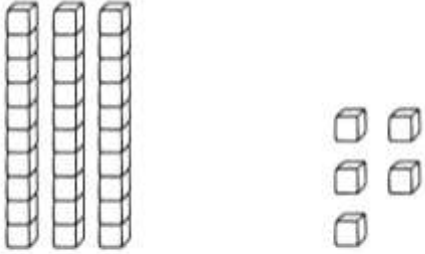
Name :

Subject:

Class:

Date:

**Q2:** Write the correct number?

 ___ tens ___ ones	 ___ tens ___ ones
<input type="text"/>	<input type="text"/>

**Q3:** Write the value of the underlined number.

<u>2</u> 4	2 tens
5 <u>2</u>	
<u>7</u> 0	



## Worksheet

Name :

Subject:

Class:

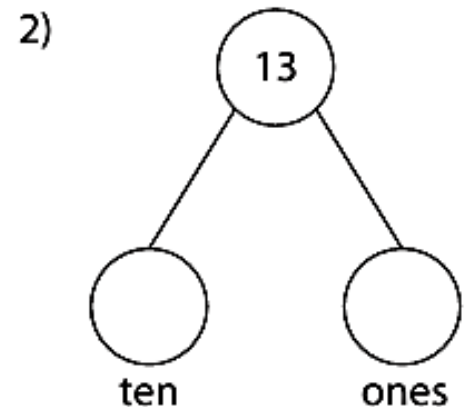
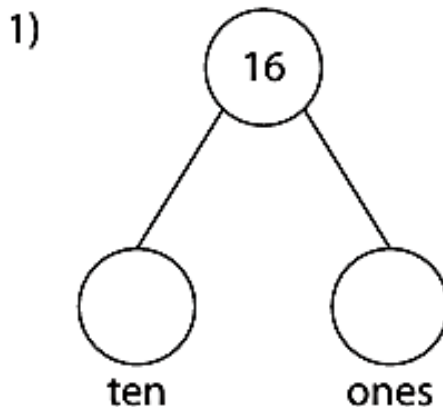
Date:

**Q4:** Decompose each number.

1)  $15 = \underline{\quad\quad} + \underline{\quad\quad}$

2)  $18 = \underline{\quad\quad} + \underline{\quad\quad}$

**Q5:** Split each number as tens and ones, and write them in the circles.



**Q6:** Use  $<$ ,  $>$  or  $=$  to compare

$80 \bigcirc 32$

$56 \bigcirc 37$

$25 \bigcirc 93$

$45 \bigcirc 62$

$74 \bigcirc 74$

$68 \bigcirc 34$