



Math (CP) Department

Academic Year : 2025/2026

Name : _____

Grade : 3 (A & B)

Date : _____

Extra Worksheet

Q1) Complete the following number patterns.

14, 18, 22, _____ , _____ , _____ Rule: _____

28, 26, 24, _____ , _____ , _____ Rule: _____

65, _____ , 75, 80, _____ , _____ Rule: _____

150, 145, _____ , 135, _____ , _____ Rule: _____

36, 30, 24, _____ , _____ , _____ Rule: _____

90, _____ , 96, 99, _____ , _____ Rule: _____

201, 211, 221, _____ , _____ , _____ Rule: _____

77, 66, 55, _____ , _____ , _____ Rule: _____

9, _____ , 19, 24, _____ , _____ Rule: _____


48, 44, _____ , _____ , 32, _____ Rule: _____

99, 90, _____ , 72, _____ , _____ Rule: _____

110, 130, _____ , 170, _____ , _____ Rule: _____

Q2) Look carefully at each pattern and identify the rule it follows. Then, draw the next shapes in the sequence to complete the pattern.


1.




2.




3.



4.



5.



Good luck 😊