



Worksheet

Name:

Subject: Worksheet (5)

Class: 3 (A,B,C)

Date:

Calculate the following:

$$\begin{array}{r} 1 1 1 \\ 3449 \\ + 2559 \\ \hline 6008 \end{array}$$

$$\begin{array}{r} 1 1 1 \\ 5398 \\ + 1356 \\ \hline 7754 \end{array}$$

$$\begin{array}{r} 1 1 \\ 1198 \\ + 3089 \\ \hline 4287 \end{array}$$

$$\begin{array}{r} 1 1 1 \\ 1855 \\ + 3245 \\ \hline 5100 \end{array}$$

$$\begin{array}{r} 2 \\ 83314 \\ - 7229 \\ \hline 1105 \end{array}$$

$$\begin{array}{r} 5 12 \\ 78316 \\ - 6238 \\ \hline 1398 \end{array}$$

$$\begin{array}{r} 8 1 12 \\ 892310 \\ - 2264 \\ \hline 6966 \end{array}$$

$$\begin{array}{r} 9 10 \\ 560713 \\ - 3518 \\ \hline 2495 \end{array}$$

$$\begin{array}{r} 5 10 \\ 78713 \\ - 1128 \\ \hline 6785 \end{array}$$

Solve the following word problems:

-The amusement park had 4,725 visitors on Saturday and 3,894 visitors on Sunday. **How many more** visitors were there on Saturday **than** on Sunday?

$$\begin{array}{r} 4725 \\ - 3894 \\ \hline 831 \end{array}$$

-Lucy collected 2,347 pieces of candy during Halloween. She **gave** 1,289 pieces to her friends. How many pieces of candy does Lucy have **left**?

$$\begin{array}{r} 2347 \\ - 1289 \\ \hline 1058 \end{array}$$

-The zoo has 4,536 animals in total. If 1,784 of them are birds, how many animals **are not** birds?

$$\begin{array}{r} 4536 \\ - 1784 \\ \hline 2752 \end{array}$$

-The school library sold 3,219 books in the first week of the book fair and 2,807 books in the second week. How many books were sold **in total**?

$$\begin{array}{r} 3219 \\ + 2807 \\ \hline 6026 \end{array}$$

-Max has 2,912 toy cars. He received 1,354 **more** cars on his birthday. How many toy cars does Max have now?

$$\begin{array}{r} 2912 \\ + 1354 \\ \hline 4266 \end{array}$$

- Sarah's family packed 4,067 snacks for their camping trip. By the end of the trip, they had **eaten** 2,638 snacks. How many snacks do they have **left**?

$$\begin{array}{r} 4067 \\ - 2638 \\ \hline 1429 \end{array}$$

-In Emma's vegetable garden, she picked 3,589 tomatoes and 2,476 cucumbers. **How many more** tomatoes did she pick **than** cucumbers?

$$\begin{array}{r} 3589 \\ - 2476 \\ \hline 1113 \end{array}$$

Read the following problems then workout the answers.

Show your work.

1. What is the sum of 3,487 and 2,936? Show your work.

$$\begin{array}{r} \\ 3487 \\ + 2936 \\ \hline 6423 \end{array}$$

2. Subtract 4,219 from 7,005. What is the result?

$$\begin{array}{r} \\ 7005 \\ - 4219 \\ \hline 2786 \end{array}$$

3. What number is 1,000 more than 6,342?

$$7342$$

4. Find the number that is 100 less than 9,581.

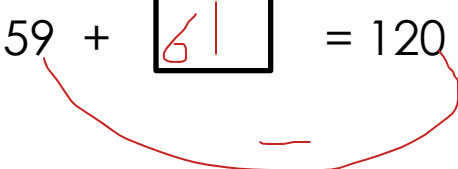
$$9481$$

5. Tom had 2,564 marbles. He found 10 more marbles and then lost 100 marbles. How many marbles does he have now?

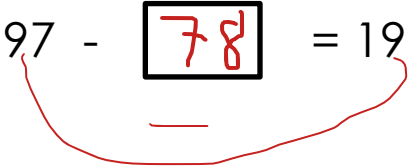
$$2564 \xrightarrow{+10} 2574 \xrightarrow{-100} 2474$$

Find the missing number in each of the following?

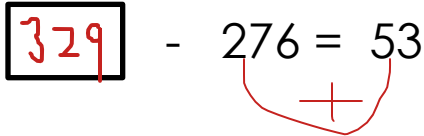
a) $59 + \boxed{61} = 120$



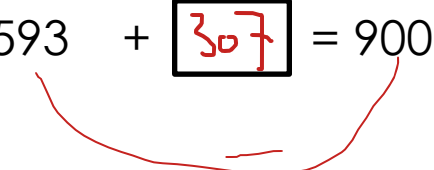
b) $97 - \boxed{78} = 19$



c) $\boxed{329} - 276 = 53$



d) $593 + \boxed{307} = 900$



e) $\boxed{239} + 169 = 408$

