



# Worksheet

Name :

Subject:

Odd and even numbers

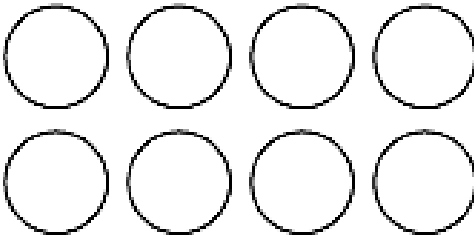
Class:

Grade 1 A/ B

Date:

----/11/2025

Count, make groups of 2's then decide whether the number is odd or even. Circle the correct answer.



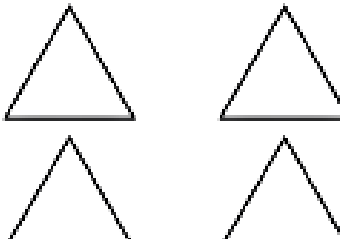
Odd      Even

\_\_\_\_\_



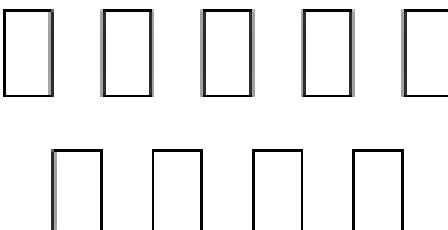
Odd      Even

\_\_\_\_\_



Odd      Even

\_\_\_\_\_



Odd      Even

\_\_\_\_\_



# Worksheet

Name : \_\_\_\_\_

Subject: \_\_\_\_\_

Class: \_\_\_\_\_

Date: \_\_\_\_\_



Count the objects and tell whether there is an odd or even number of objects



How many sheep? \_\_\_\_\_

Odd or even? \_\_\_\_\_



How many bananas? \_\_\_\_\_

Odd or even? \_\_\_\_\_



How many babys? \_\_\_\_\_

Odd or even? \_\_\_\_\_



How many cats? \_\_\_\_\_

Odd or even? \_\_\_\_\_



How many frogs? \_\_\_\_\_

Odd or even? \_\_\_\_\_



How many people? \_\_\_\_\_

Odd or even? \_\_\_\_\_