



## Worksheet

Name :

Subject:

**Complement of 100**

Class:


**Grade 2 A/ B**

Date:


**----/11/2025**

Fill in the missing number bonds in these bar models  
so that the total is 100.


1)




2)




3)




4)




5)




6)




7)




8)




9)




10)




11)




12)




13)



14)



15)



16)

