

Cambridge Assessment International Education
Cambridge Primary Checkpoint

CANDIDATE
NAME


--

CENTRE
NUMBER

--	--	--	--	--

CANDIDATE
NUMBER

--	--	--	--



ENGLISH AS A SECOND LANGUAGE

0837/03

Paper 3 Listening

October 2019

approximately 25 minutes

Candidates answer on the Question Paper.

No Additional Materials are required.

READ THESE INSTRUCTIONS FIRST

Write your centre number, candidate number and name in the spaces at the top of this page.

While you are listening, write your answers on the question paper.

Write in dark blue or black pen.

Do not use staples, paper clips, glue or correction fluid.

DO **NOT** WRITE IN ANY BARCODES.

Answer **all** questions.

You should pay attention to punctuation, spelling and handwriting.

At the end of the examination, fasten all your work securely together.

The number of marks is given in brackets [] at the end of each question or part question.

The total number of marks for this paper is 20.

INFORMATION FOR CANDIDATES

There are four parts to the test.

You will hear each part twice.

For each part of the test there will be time for you to look through the questions and time for you to check your answers.

This document consists of **6** printed pages and **2** blank pages.

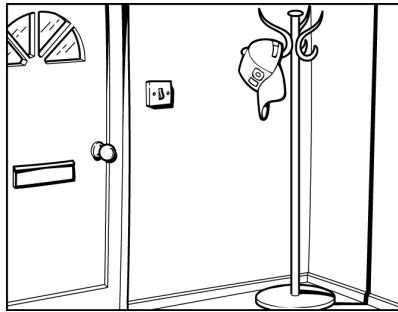




Part 1




Questions 1–5

For each question, there are three pictures and a short recording.
Choose the correct picture and circle the letter **A**, **B** or **C** below it.

Example: Where is the girl's hat?



**A****B****C**

1 What is the boy going to do this evening?

**A****B****C**

[1]


2 Where is the girl now?

**A****B****C**


[1]

3


3 What time does the boy need to be ready to leave?



A



B

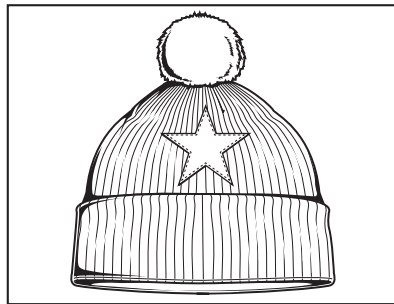


C


!

[1]


4 Which is the girl's new hat?



A



B



C


!

[1]

5 Who did the girl buy a present for?



A



B



C

!

[1]

Part 2

Questions 6–10

You will hear Ella talking to a friend about a school trip.
For each question, circle the correct answer **A**, **B** or **C**.

6 Where are the class going on their geography trip?

A the beach

B the forest

C the mountains

[1]

7 When must Ella be at school?

A by 9:00

B by 9:15

C by 9:30

[1]

8 What must Ella wear?

A a raincoat

B boots

C a sweater

[1]

9 Ella should take

A a drink.

B sandwiches.

C some money.

[1]

10 What will the class do after the trip?

A write about the day

B do a quiz

C draw a poster

[1]

Part 3

Questions 11–15

You will hear an interview with a girl called Sophie Jones, who is talking about her new hobby of horse riding.

For each question, circle the correct answer **A**, **B** or **C**.

11 Before Sophie had her first riding lesson,

- A** she already knew what it would involve.
- B** she was sure it was the right hobby for her.
- C** she got some advice that made her feel better.

[1]

12 When Sophie went to her first lesson

- A** she needed to change her clothes.
- B** she had to ride in the rain.
- C** she had problems getting onto her horse.

[1]

13 Where did Sophie's teacher take her for her ride?

- A** across some fields
- B** into a wood
- C** along some streets

[1]

14 Sophie says that during her lesson

- A** the horse seemed to know what to do.
- B** the teacher stayed close by her side.
- C** the instructions became easier to understand.

[1]

15 How did Sophie feel at the end of her first lesson?

- A** less tired than she expected
- B** keen to book another lesson
- C** more confident about riding

[1]

Part 4

Questions 16–20

You will hear a teacher telling his class about a science day at school.
For each question, fill in the missing information in the numbered space.

Science day at school

Topic of science day this year: (16)

Name of scientist helping class 6: Dr. (17)

What to take to school for our science experiment: (18)

What our class will do after science day: a (19)

Amount my parents have to pay for science day: (20)

[Total: 5 marks]