



Name: _____

Date _____

Subject: Math

practicing worksheet #3

Class: Grade 2 (A , B ,C)

O

Circle the ten that each number rounds to.

Do these numbers round up or down?



20

Round up / Round down

29

30

Oh, it is raining
outside, take
the bird to the
nearest umbrella



70

Round up / Round down

78

80

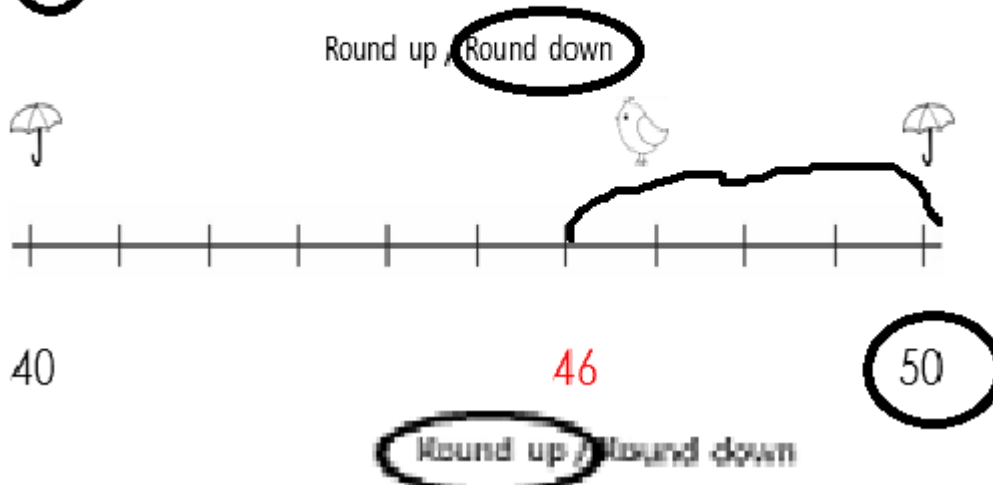
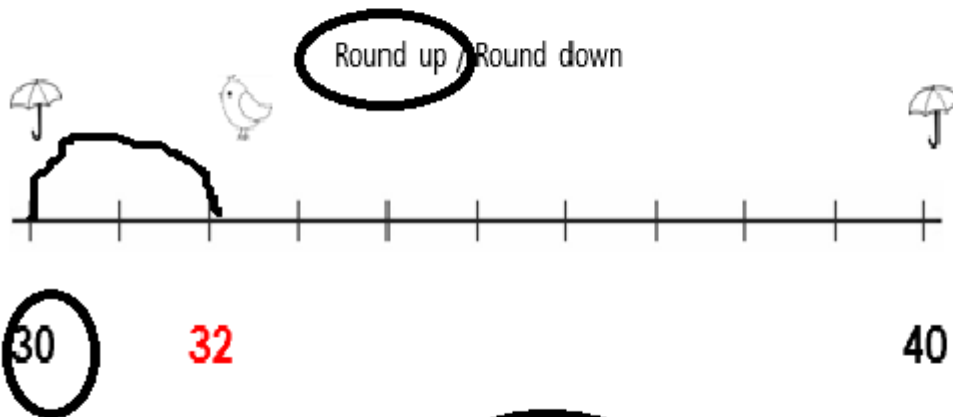
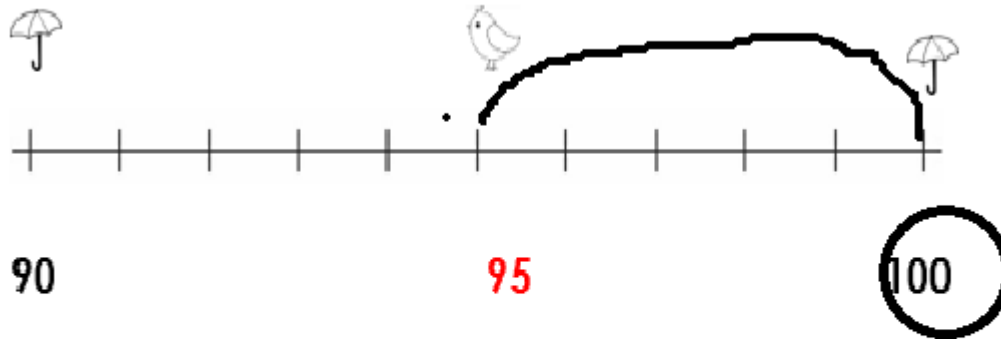


40

42

50

Round up / Round down



Round the following numbers to the nearest 10. The first one has been done for you.

243 → 240

185 → 190

297 → 300

561 → 560

188 → 190

616 → 620

765 → 770

322 → 320

625 → 630

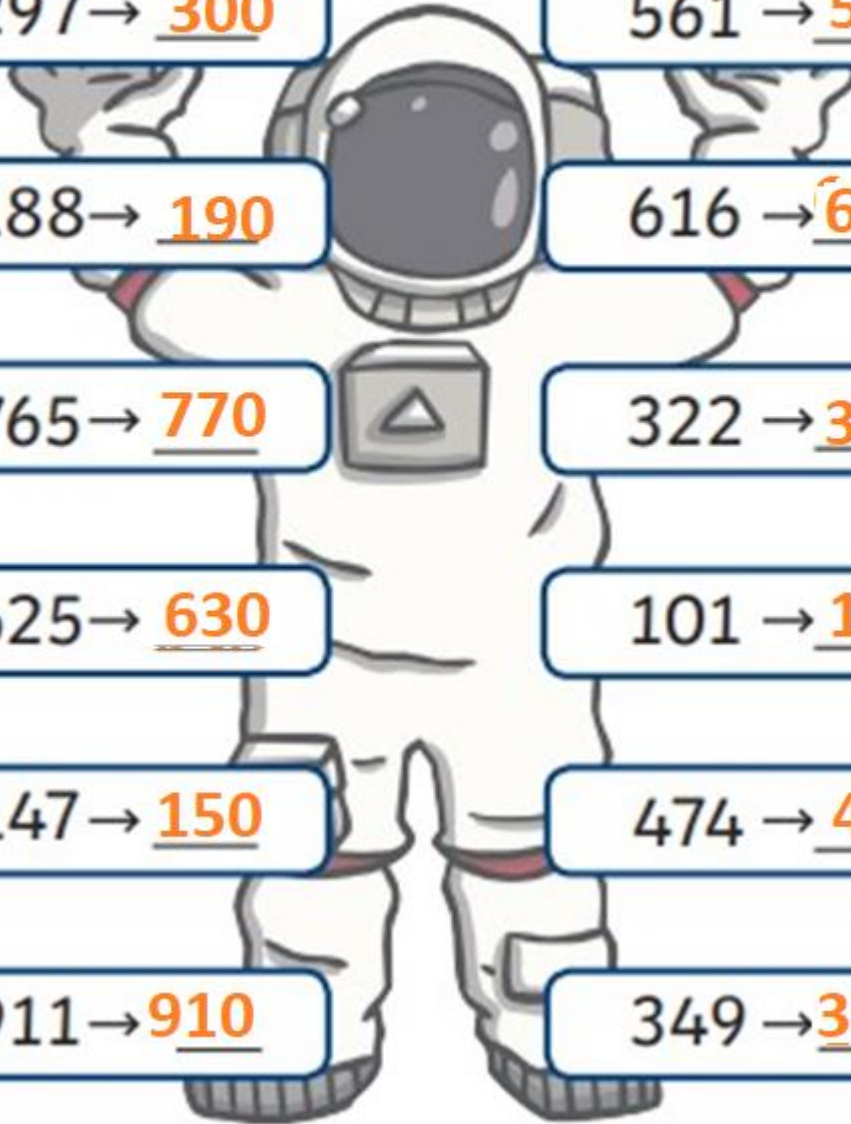
101 → 100

147 → 150

474 → 470

911 → 910

349 → 350



Round the following numbers to the nearest 100.

561

600

429

400

648

600

671

700

890

900

350

400

745

700

949

900

690

700

856

900

589

600

362

400

A small book has 148 pages.

a) Round the number of the pages to the nearest 100.

_____ **100** _____

b) Would it be all right if the book was printed with the rounded number of pages? Explain your answer.

No, it would not be all right if the book was printed with the rounded number of pages, because rounding changes the actual number. The book really has 148 pages, but rounding to the nearest hundred gives 100, which is much less and would leave out many pages of the book.

1.3 Estimating and rounding

3 Round each number to the nearest 10.

271 **270**

138 **140**

397 **400**

404 **400**

4 Round each number to the nearest 100.

164 **200**

325 **300**

449 **400**

250 **300**

1 Numbers to 1000

4 Round each number to the nearest 100.

123 **100**

678 **700**

385 **400**

907 **900**

740 **700**

598 **600**

1 Numbers to 1000

6 Round each amount to the nearest \$10.

\$537 **540\$**

\$772 **780\$**

\$695 **700\$**

\$808 **800\$**

7 Round each amount to the nearest 100 kilograms.

150 kilograms **200** kilograms

555 kilograms **600** kilograms

444 kilograms **400** kilograms

501 kilograms **500** kilograms

3 Round each number to the nearest 10.

123 **120**

678 **680**

385 **390**

907 **910**

740 **740**

598 **600**