



# Worksheet

Name :

Subject:

**Skip counting by 5's**

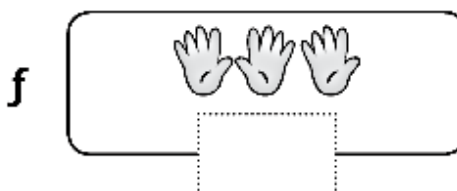
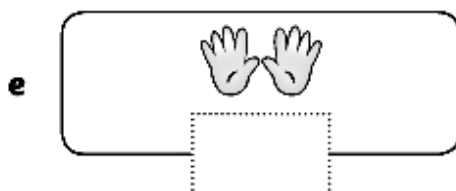
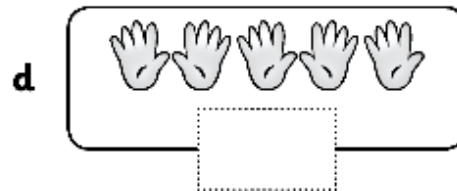
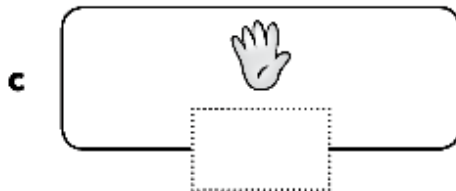
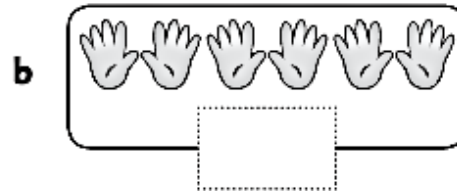
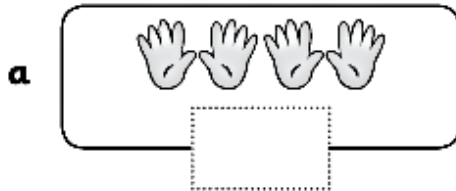
Class:

**Grade 1 A/ B**

Date:

**----/10 /2025**

1. Count in 5's to find how many fingers and thumbs.



2 What number comes next in the pattern?.

a. 35, 40, \_\_\_\_\_, \_\_\_\_\_, \_\_\_\_\_, \_\_\_\_\_.

b. 60, 65, \_\_\_\_\_, \_\_\_\_\_, \_\_\_\_\_, \_\_\_\_\_, \_\_\_\_\_.

c. 20, 25, \_\_\_\_\_, \_\_\_\_\_, \_\_\_\_\_, \_\_\_\_\_, \_\_\_\_\_.