



Worksheet

Name :

Subject:

Place value revision

Class:

Grade 1 A/ B

Date:

----/10/2025

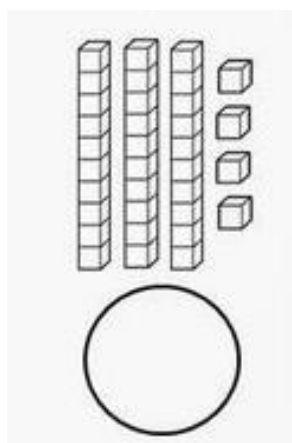
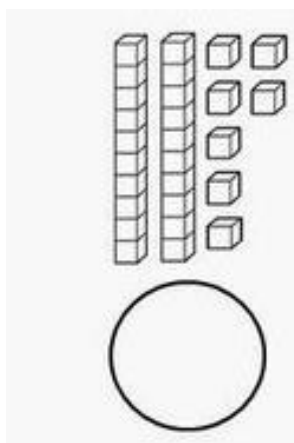
Q.1 Write the numbers in tens and ones.

42 = ___ tens ___ ones

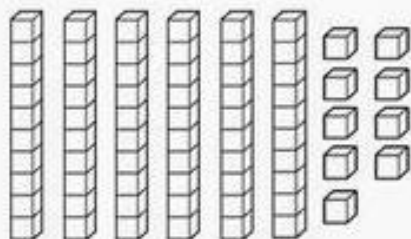
35 = ___ tens ___ ones

28 = ___ tens ___ ones

Q.2 How many cubes do you have each time?



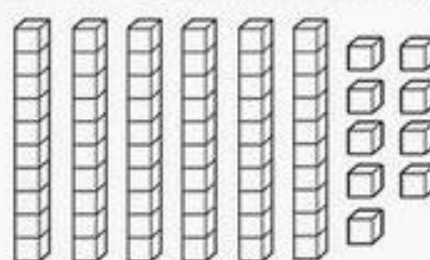
Q3 Color in 36. Fill in the blanks.



___ tens ___ ones

___ + ___ = ___

Q4 Color in 48. Fill in the blanks.



___ tens ___ ones

___ + ___ = ___



Worksheet

Name :

Subject:

Class:

Date:

Q. 5 Write the number.

5 tens 3 ones = ____

$$40 + 3 = \underline{\quad}$$

2 tens 5 ones = ____

$$10 + 2 = \underline{\quad}$$

4 tens 6 ones = ____

$$20 + 4 = \underline{\quad}$$

$$30 + 7 = \underline{\quad}$$

Q.6 Write the numbers in expanded form.

a. $26 = \underline{\quad} + \underline{\quad}$

b. $45 = \underline{\quad} + \underline{\quad}$