



Worksheet

Name :

Subject:

Decomposing numbers

Class:

Grade 1 A/ B

Date:

----/9/2025

Q.1 Write the number.

8 tens = _____

_____ = 5 ones

2 tens 6 ones = _____

_____ = 3 tens 4 ones

4 tens 2 ones = _____

_____ = 7 tens 7 ones

Q.2 Write each number in expanded form.

Example: $92 = 90 + 2$

a. $87 = \underline{\hspace{1cm}} + \underline{\hspace{1cm}}$

b. $58 = \underline{\hspace{1cm}} + \underline{\hspace{1cm}}$

c. $39 = \underline{\hspace{1cm}} + \underline{\hspace{1cm}}$

d. $35 = \underline{\hspace{1cm}} + \underline{\hspace{1cm}}$

e. $3 = \underline{\hspace{1cm}} + \underline{\hspace{1cm}}$

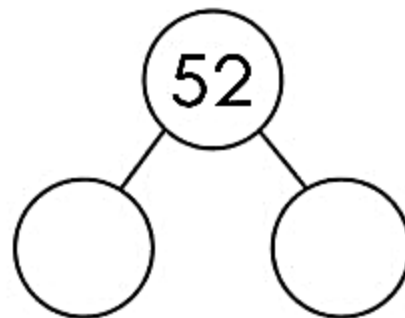
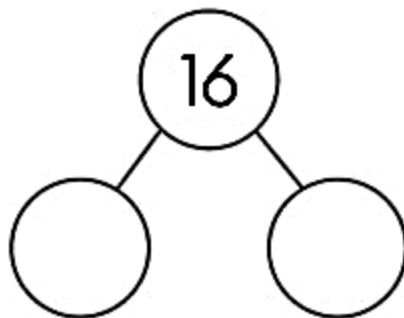
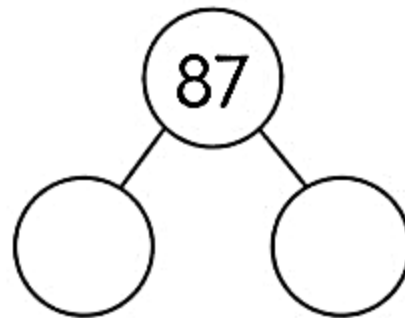
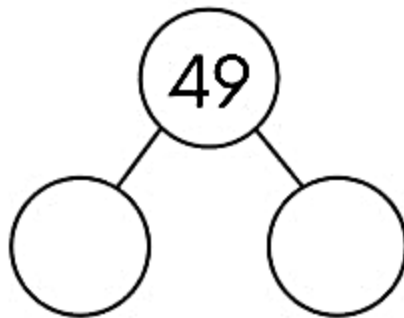
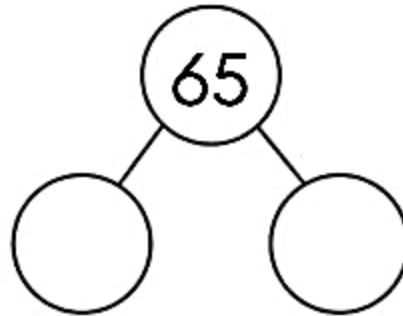
f. $48 = \underline{\hspace{1cm}} + \underline{\hspace{1cm}}$

g. $42 = \underline{\hspace{1cm}} + \underline{\hspace{1cm}}$

h. $11 = \underline{\hspace{1cm}} + \underline{\hspace{1cm}}$



Q.3 Use part- part whole model to partition the numbers into tens and ones.



Very 
Good!