



Worksheet

Name :

Subject:

Tens and ones

Class:

Grade 1 A/ B

Date:

----/9/2025

Q.1 Write the correct number of tens and ones in the boxes next to the number.

a. $53 = \boxed{5} \text{ tens} + \boxed{3} \text{ ones}$

b. $21 = \boxed{} \text{ tens} + \boxed{} \text{ ones}$

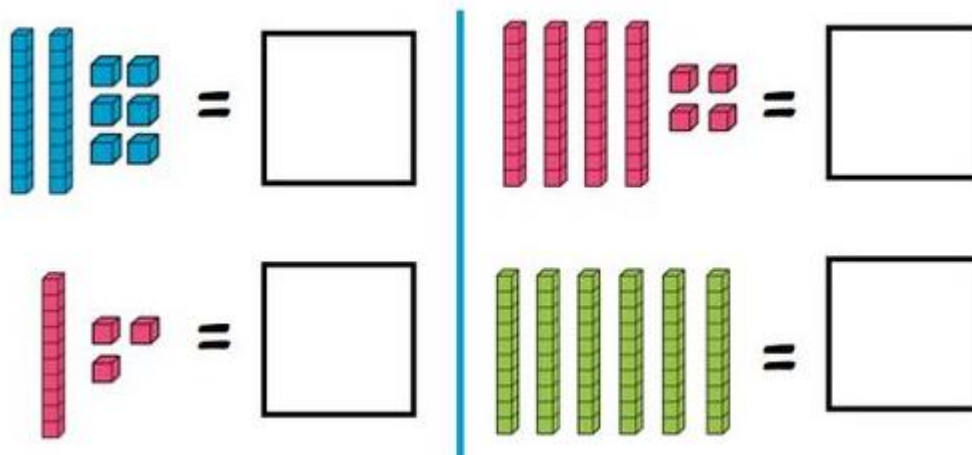
c. $49 = \boxed{} \text{ tens} + \boxed{} \text{ ones}$

d. $72 = \boxed{} \text{ tens} + \boxed{} \text{ ones}$

e. $86 = \boxed{} \text{ tens} + \boxed{} \text{ ones}$

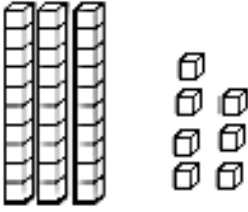
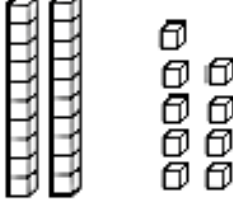
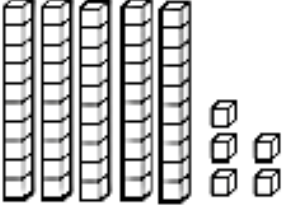
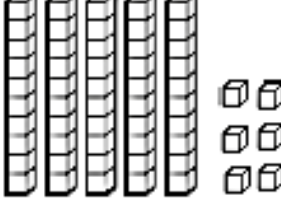
f. $50 = \boxed{} \text{ tens} + \boxed{} \text{ ones}$

Q.2 How many cubes each time?





Q.3 Count the tens and ones. Write the number in standard Form.

 <table border="1"><tr><td>tens</td><td>ones</td></tr><tr><td></td><td></td></tr></table>	tens	ones			 <table border="1"><tr><td>tens</td><td>ones</td></tr><tr><td></td><td></td></tr></table>	tens	ones		
tens	ones								
tens	ones								
 <table border="1"><tr><td>tens</td><td>ones</td></tr><tr><td></td><td></td></tr></table>	tens	ones			 <table border="1"><tr><td>tens</td><td>ones</td></tr><tr><td></td><td></td></tr></table>	tens	ones		
tens	ones								
tens	ones								

Q.4 Draw these numbers in tens and ones using base tens blocks.

13

25

43